

Advanced Kids Series
First Terminal Evaluation 2077

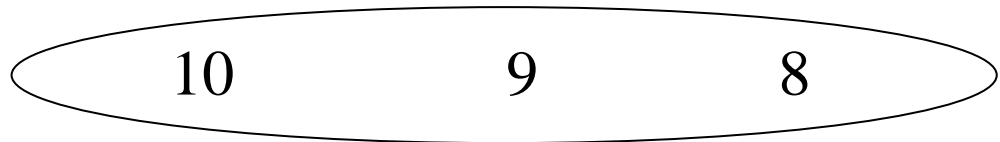


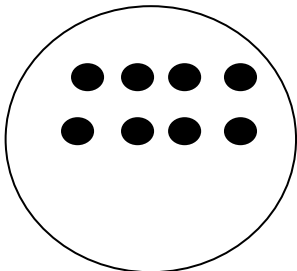
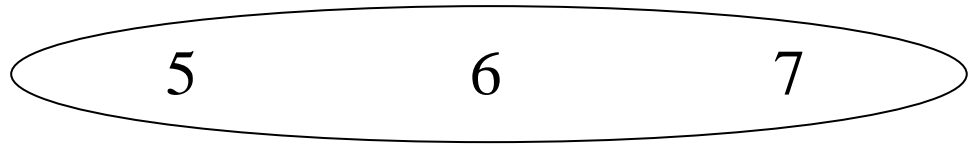

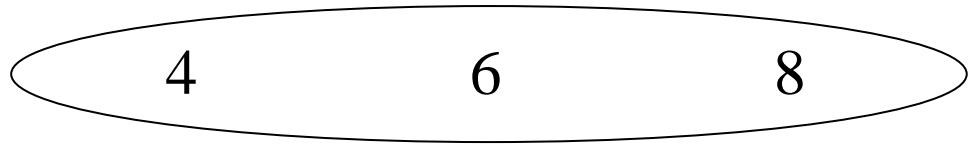

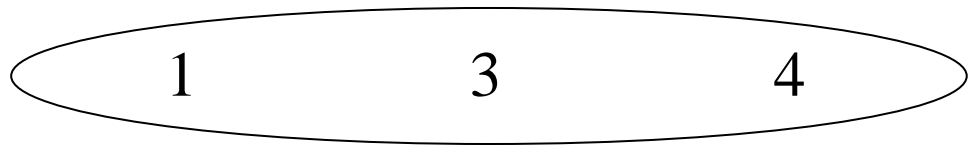

Subject : Maths

LKG

Name :

Roll No.

1. Count the dots and tick (\checkmark) the correct number.



2. Match from the both sides.

ONE

3

two

TWO

5

one

THREE

1

four

FOUR

6

three

FIVE

2

six

SIX

4

five

SEVEN

8

ten

EIGHT

7

eight

NINE

10

nine

TEN

9

seven


3. Write in words.

1 _____ 2 _____ 3 _____

4 _____ 5 _____ 6 _____

7 _____ 8 _____

9 _____ 10 _____



4. चित्र गनेर ठीक सङ्ख्यामा रेजा (✓) लगाउनुहोस् ।




१	२	३
---	---	---



२	३	४
---	---	---



४	३	२
---	---	---



२	३	४
---	---	---



४	५	६
---	---	---



६	७	८
---	---	---

5. अङ्क र अक्षरको जोडा मिलाउनुहोस् र फेरि लेख्नुहोस् ।

१

दुई _____

२

एक _____

३

चार _____

४

तीन _____

५

छ _____

६

पाँच _____

७

आठ _____

८

सात _____

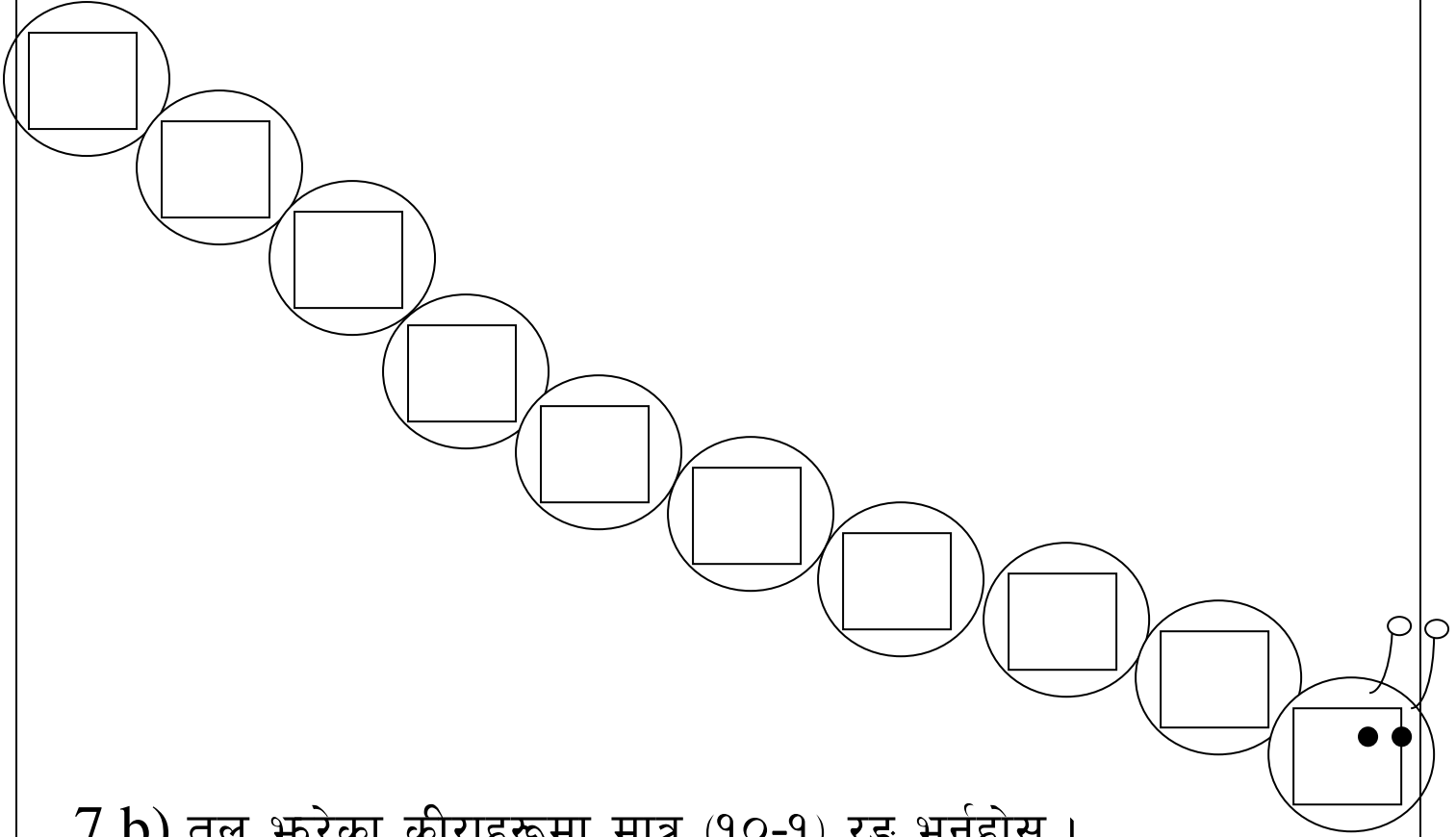
९

दस _____

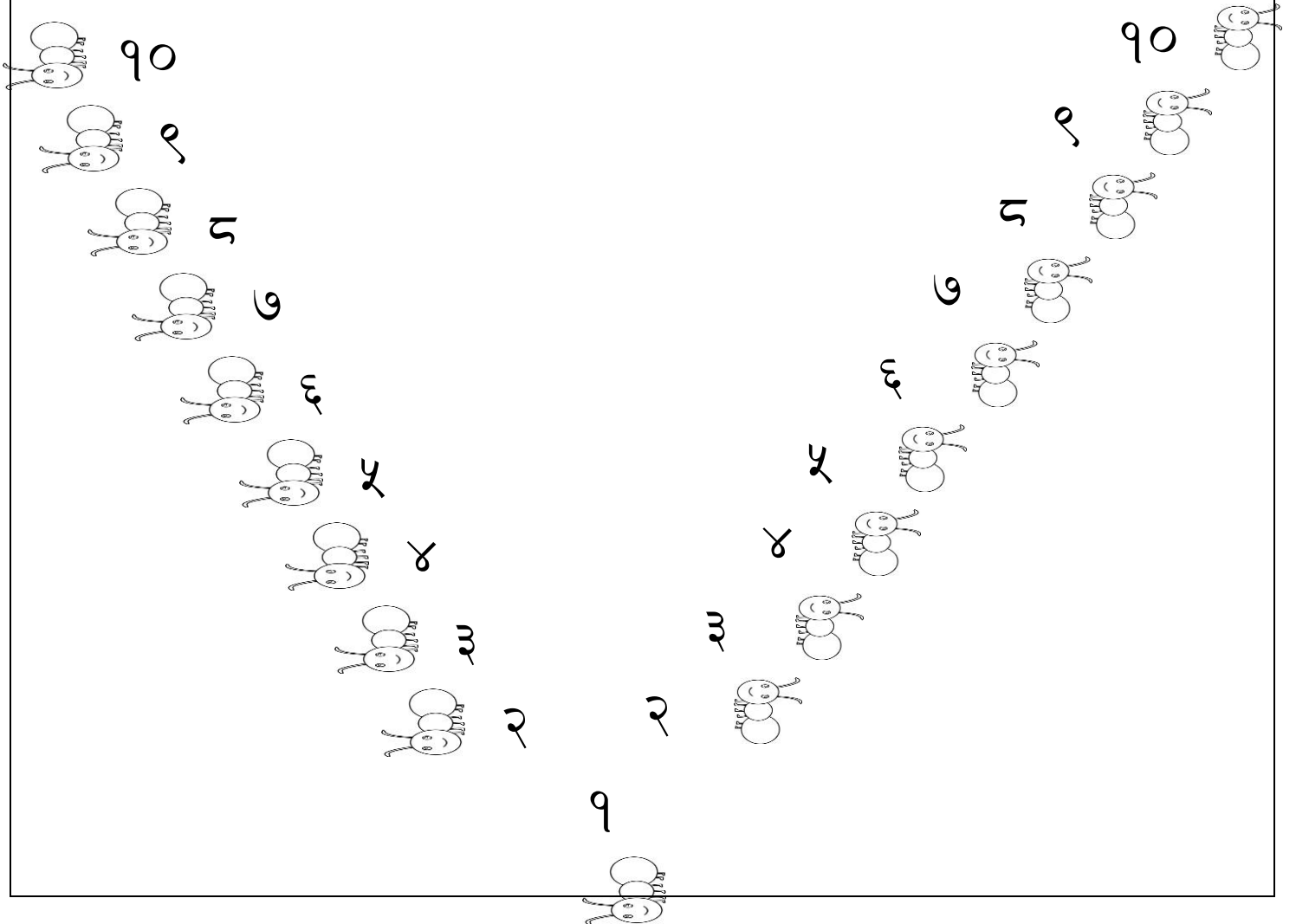
१०

नौ _____

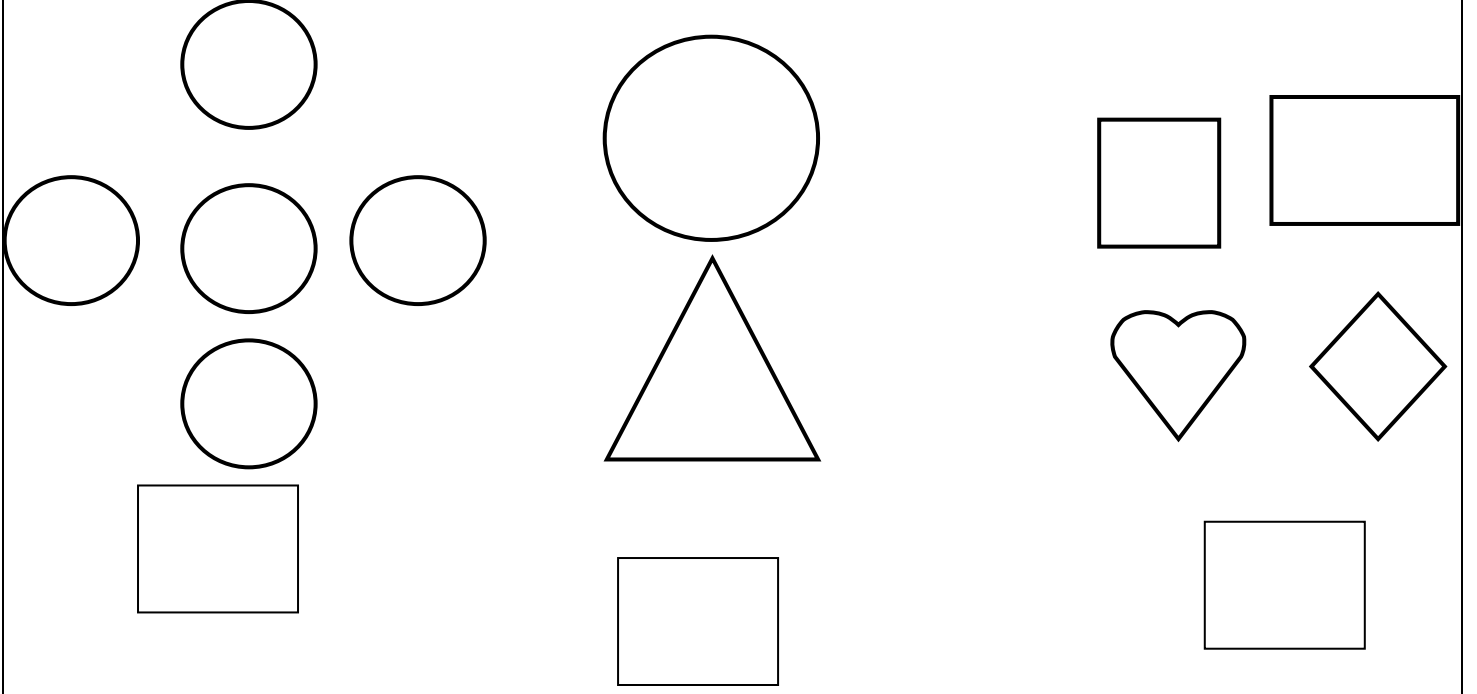
7 a) Write in descending order 10 to 1.



7 b) तल भरेका कीराहरूमा मात्र (१०-१) रङ भर्नुहोस् ।

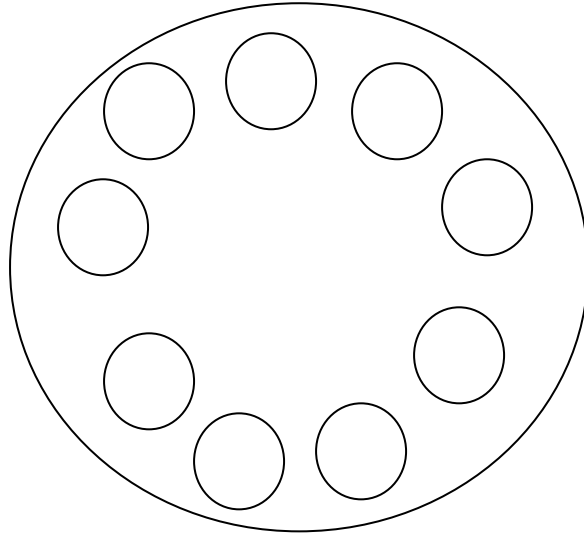


8 a) Count and write the total number of shapes.

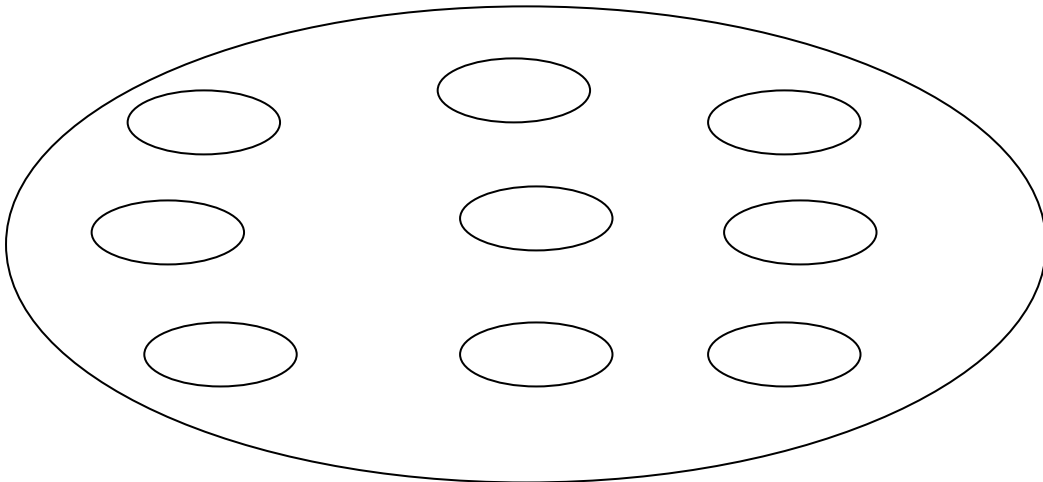


8 b) सङ्ख्या अनुसार मात्र रङ्ग भर्नुहोस् ।


५ ओटामा

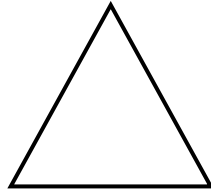



७ ओटामा




9. Write the name of the following shapes.

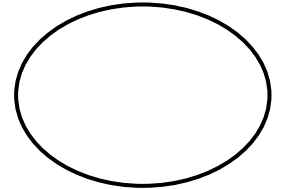

















10 a) Match the following.

$10+1$

12

$10+2$

13

$10+3$

11

$10+4$

16

$10+5$

14

$10+6$

17

$10+7$

15

$10+8$

20

$10+9$

18

$10+10$

19

10 b) Fill in the missing letters to make the names of numbers.

$10+1=$

el ___ v___ n

$10+2=$

tw___l___

$10+3=$

th___rt___n

$10+4=$

f___ ___rteen

$10+5=$

f___ft___en

$10+6=$

si___t___en

$10+7=$

s___v___nt___n

$10+8=$

ei___h___een

$10+9=$

n___n___t___n

$10+10=$

t___ent___

